








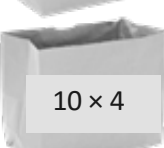












Name \_\_\_\_\_

Date \_\_\_\_\_

1. Skip-count by fours. Match each answer to the appropriate expression.

	<input type="text" value="4"/>	
	<input type="text"/>	
	<input type="text"/>	
	<input type="text"/>	
	<input type="text"/>	
	<input type="text"/>	
	<input type="text"/>	
	<input type="text"/>	
	<input type="text"/>	
	<input type="text"/>	

*Note: A dashed line connects the '4' in the first box to the '1x4' box on the right.*

2. Lisa places 5 rows of 4 juice boxes in the refrigerator. Draw an array and skip-count to find the total number of juice boxes.

There are \_\_\_\_\_ juice boxes in total.

---

3. Six folders are placed on each table. How many folders are there on 4 tables? Draw and label a tape diagram to solve.

4. Find the total number of corners on 8 squares.