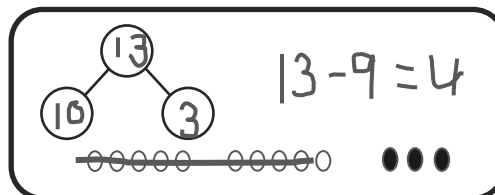


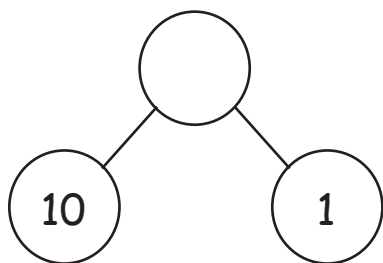
Name _____

Date _____

Solve. Use 5-group rows, and cross out to show your work. Write number sentences.

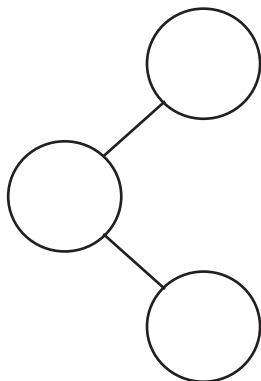


1. In a park, 10 dogs are running on the grass, and 1 dog is sleeping under the tree. 9 of the running dogs leave the park. How many dogs are left in the park?



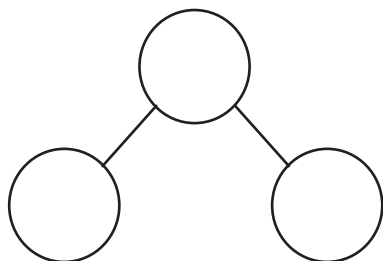
There are ____ dogs left in the park.

2. Alejandro had 9 rocks in his yard and 10 rocks in his room. 9 of the rocks in his room are gray rocks, and the rest of the rocks are white. How many white rocks does Alejandro have?



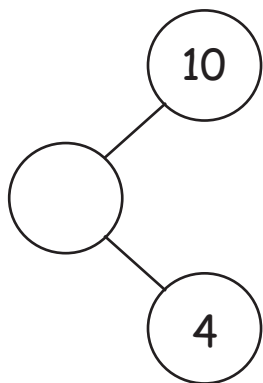
Alejandro has ____ white rocks.

3. Sophia has 8 toy cars in the kitchen and 10 toy cars in her bedroom. 9 of the toy cars in the bedroom are blue. The rest of her cars are red. How many red cars does Sophia have?



Sophia has ____ red cars.

4. Complete the number bond, and fill in the math story. Use 5-group rows, and cross out to show your work. Write number sentences.



There were ____ birds splashing in a puddle and ____ birds walking on the dry grass. 9 of the splashing birds flew away. How many birds are left?

There are ____ birds left.