


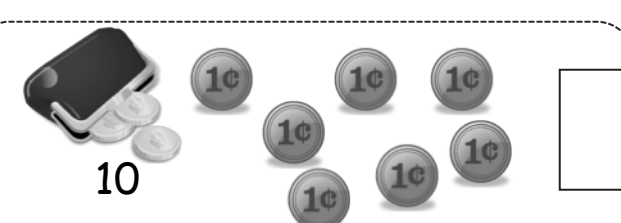
Name \_\_\_\_\_

Date \_\_\_\_\_

Circle **ten**. Write the number. How many **tens** and **ones**?

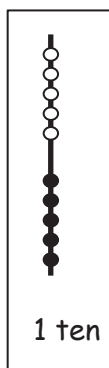
1.  \_\_\_\_\_

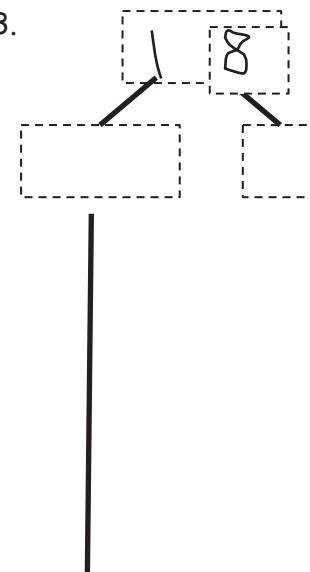
is the same as  
\_\_\_\_\_ ten and \_\_\_\_\_ ones.

2.  \_\_\_\_\_

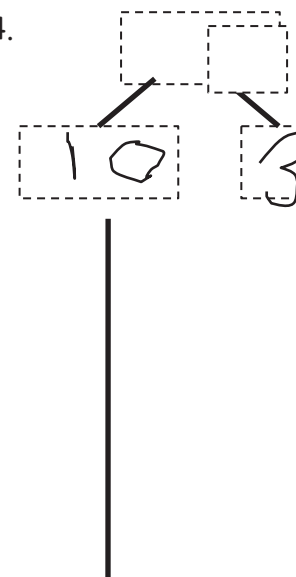
is the same as  
\_\_\_\_\_ ones and \_\_\_\_\_ ten.

Use the Hide Zero pictures to draw the ten and ones shown on the cards.



3.  \_\_\_\_\_

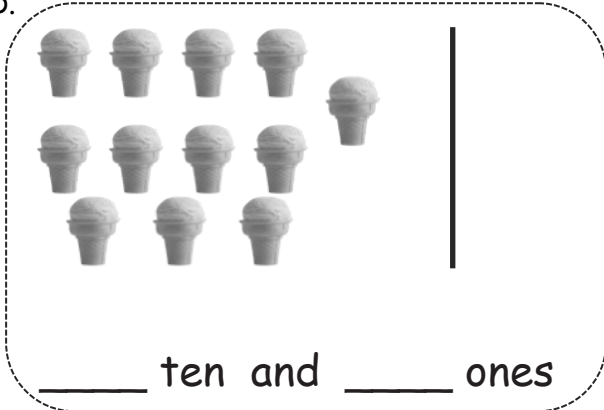
\_\_\_\_\_ ten and \_\_\_\_\_ ones

4.  \_\_\_\_\_

\_\_\_\_\_ ten and \_\_\_\_\_ ones

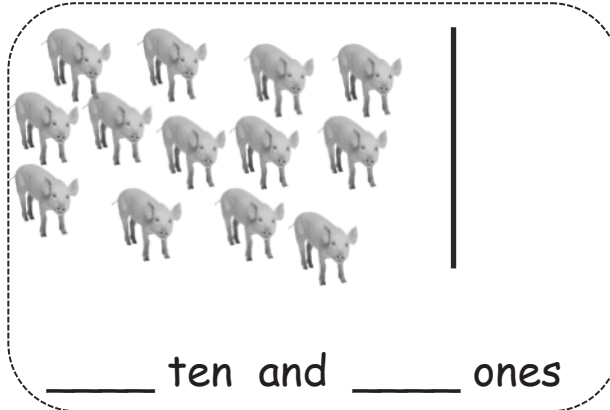
Draw using 5-groups columns to show the tens and ones.

5.



\_\_\_\_\_ ten and \_\_\_\_\_ ones

6.



\_\_\_\_\_ ten and \_\_\_\_\_ ones

Draw your own examples using 5-groups columns to show the tens and ones.

7. 16



16 is the same as  
\_\_\_\_\_ ten and \_\_\_\_\_ ones.

8. 19



19 is the same as  
\_\_\_\_\_ ones and \_\_\_\_\_ ten.