


Name _____

Date _____

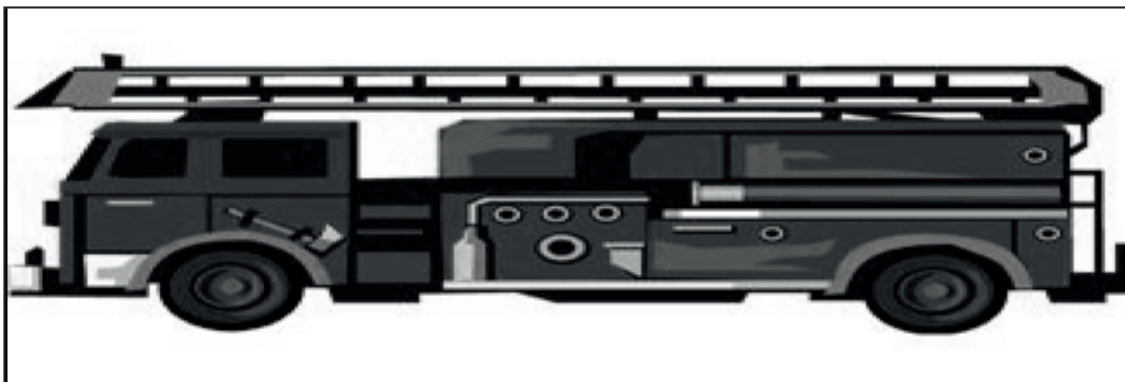
1. Justin collects stickers. Use centimeter cubes to measure Justin's stickers. Complete the sentences about Justin's stickers.



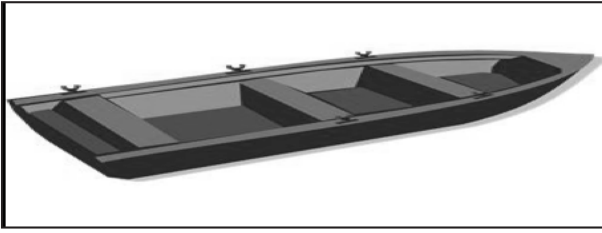
- a. The motorcycle sticker is _____ centimeters long.



- b. The car sticker is _____ centimeters long.



- c. The fire truck sticker is _____ centimeters long.



d. The rowboat sticker is _____ centimeters long.



e. The airplane sticker is _____ centimeters long.

2. Use the stickers' measurements to order the stickers of the **fire truck**, the **rowboat**, and the **airplane** from longest to shortest. You can use drawings or names to order the stickers.

Longest



Shortest

3. Fill in the blanks to make the statements true. (There may be more than one correct answer.)
- a. The airplane sticker is longer than the _____ sticker.
- b. The rowboat sticker is longer than the _____ sticker and shorter than the _____ sticker.
- c. The motorcycle sticker is shorter than the _____ sticker and longer than the _____ sticker.
- d. If Justin gets a new sticker that is longer than the rowboat, it will also be longer than which of his other stickers? _____