
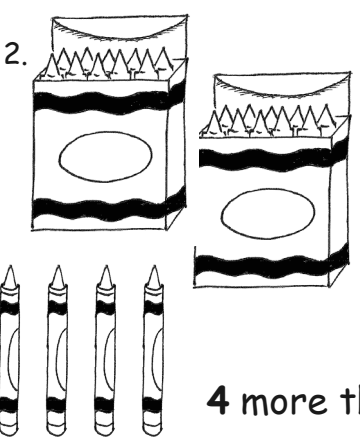
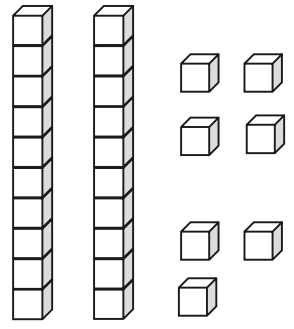
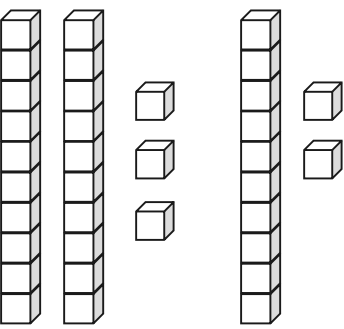
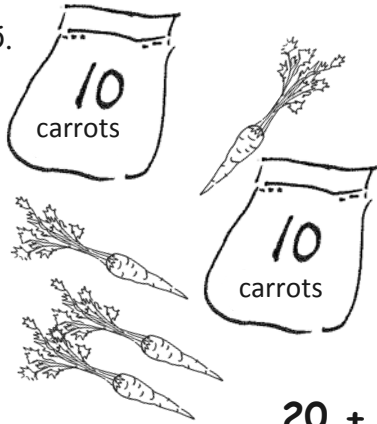
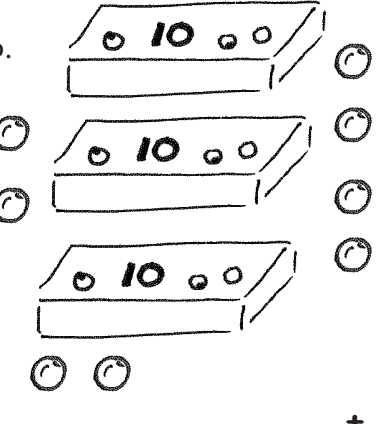


Name _____


Date _____

Fill in the number bond, or write the tens and ones. Complete the addition sentences.

<p>1. </p> <div style="display: flex; align-items: center; justify-content: center;"> <table border="1" style="border-collapse: collapse; margin-right: 20px;"> <tr><td style="width: 40px; height: 40px;"></td></tr> <tr><td style="width: 40px; height: 40px;"></td></tr> </table> <table border="1" style="border-collapse: collapse;"> <tr><td style="width: 60px; height: 60px;"></td></tr> </table> </div> <p style="text-align: center;">$3 + 20 = \underline{\quad}$</p> <p style="text-align: center;">20 more than 3 is $\underline{\quad}$.</p>				<p>2. </p> <div style="display: flex; align-items: center; justify-content: center;"> <table border="1" style="border-collapse: collapse; margin-right: 20px;"> <tr><td style="width: 40px; height: 40px;"></td></tr> <tr><td style="width: 40px; height: 40px;"></td></tr> </table> <table border="1" style="border-collapse: collapse;"> <tr><td style="width: 60px; height: 60px;"></td></tr> </table> </div> <p style="text-align: center;">$20 + 4 = \underline{\quad}$</p> <p style="text-align: center;">4 more than 20 is $\underline{\quad}$.</p>					
<p>3. </p> <table border="1" style="border-collapse: collapse; margin-left: auto; margin-right: auto;"> <thead> <tr> <th style="padding: 5px;">tens</th> <th style="padding: 5px;">ones</th> </tr> </thead> <tbody> <tr> <td style="width: 60px; height: 60px;"></td> <td style="width: 60px; height: 60px;"></td> </tr> </tbody> </table> <p style="text-align: center;">$7 + 20 = \underline{\quad}$</p>	tens	ones			<p>4. </p> <table border="1" style="border-collapse: collapse; margin-left: auto; margin-right: auto;"> <thead> <tr> <th style="padding: 5px;">tens</th> <th style="padding: 5px;">ones</th> </tr> </thead> <tbody> <tr> <td style="width: 60px; height: 60px;"></td> <td style="width: 60px; height: 60px;"></td> </tr> </tbody> </table> <p style="text-align: center;">$\underline{\quad} + 30 = \underline{\quad}$</p>	tens	ones		
tens	ones								
tens	ones								
<p>5. </p> <table border="1" style="border-collapse: collapse; margin-left: auto; margin-right: auto;"> <thead> <tr> <th style="padding: 5px;">tens</th> <th style="padding: 5px;">ones</th> </tr> </thead> <tbody> <tr> <td style="width: 60px; height: 60px;"></td> <td style="width: 60px; height: 60px;"></td> </tr> </tbody> </table> <p style="text-align: center;">$20 + \underline{\quad} = \underline{\quad}$</p>	tens	ones			<p>6. </p> <table border="1" style="border-collapse: collapse; margin-left: auto; margin-right: auto;"> <thead> <tr> <th style="padding: 5px;">tens</th> <th style="padding: 5px;">ones</th> </tr> </thead> <tbody> <tr> <td style="width: 60px; height: 60px;"></td> <td style="width: 60px; height: 60px;"></td> </tr> </tbody> </table> <p style="text-align: center;">$\underline{\quad} + \underline{\quad} = \underline{\quad}$</p>	tens	ones		
tens	ones								
tens	ones								

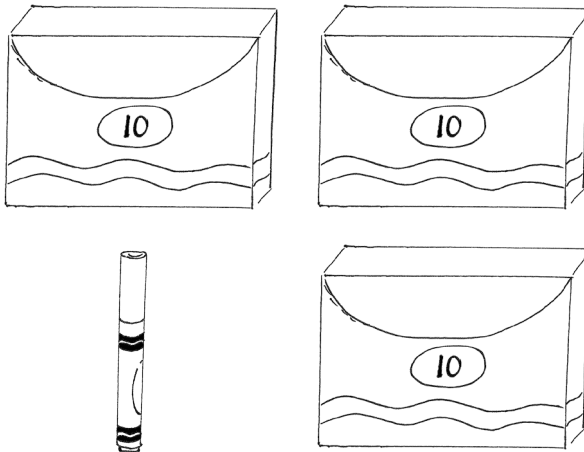
Match the pictures with the words.

7.




• • 1 and 30 make _____.

8.



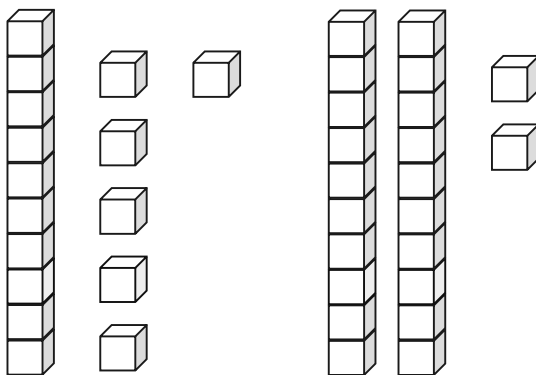
• • $8 + 30 = \underline{\hspace{2cm}}$.

9.



• • 2 more than 10 is _____.

10.



• • $20 + 4 = \underline{\hspace{2cm}}$.