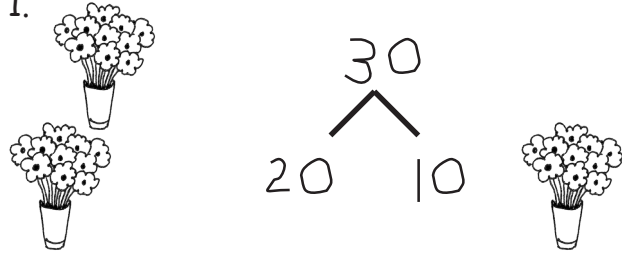



Name \_\_\_\_\_

Date \_\_\_\_\_


Draw a number bond, and complete the number sentences to match the pictures.

1. 

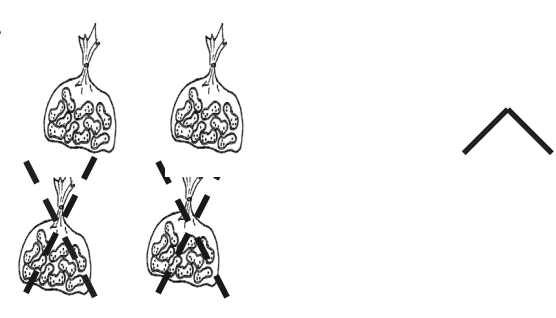
2 tens + 1 ten = 3 tens  
 $20 + 10 = 30$

2. 

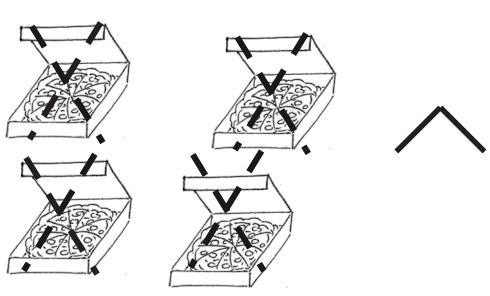
\_\_\_\_\_ tens = \_\_\_\_\_ ten + \_\_\_\_\_ tens  
 \_\_\_\_\_

3. 

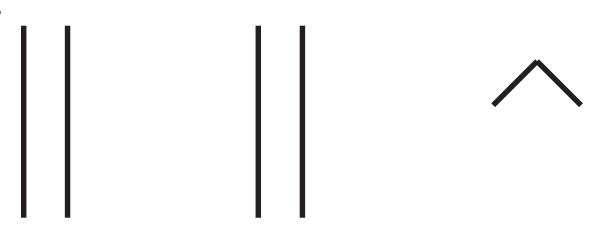
\_\_\_\_\_ tens - \_\_\_\_\_ ten = \_\_\_\_\_ tens  
 \_\_\_\_\_

4. 

\_\_\_\_\_ tens - \_\_\_\_\_ tens = \_\_\_\_\_ tens  
 \_\_\_\_\_





5. 

\_\_\_\_\_ tens - \_\_\_\_\_ tens = \_\_\_\_\_ tens  
 \_\_\_\_\_

6. 

\_\_\_\_\_ tens + \_\_\_\_\_ tens = \_\_\_\_\_ tens  
 \_\_\_\_\_

Draw quick tens and a number bond to help you solve the number sentences.

<p>7.</p>  <p><math>10 + 20 = \underline{\quad}</math></p>	<p>8.</p>  <p><math>30 - 10 = \underline{\quad}</math></p>
<p>9.</p>  <p><math>20 - 10 = \underline{\quad}</math></p>	<p>10.</p>  <p><math>30 + 10 = \underline{\quad}</math></p>

Add or subtract.

11. 2 tens + 1 ten =  $\underline{\quad}$

12.  $20 + 20 = \underline{\quad}$

13.  $40 - 10 = \underline{\quad}$

14.  $\underline{\quad} = 20 + 10$

15. 3 tens - 2 tens =  $\underline{\quad}$

16.  $20 - 10 = \underline{\quad}$

17.  $10 - 10 = \underline{\quad}$

18.  $\underline{\quad} = 30 + 10$

19.  $40 - 30 = \underline{\quad}$