

Name \_\_\_\_\_

Date \_\_\_\_\_

Draw quick tens and ones to help you solve the addition problems.

1. $17 + 2 = \underline{\quad}$	2. $17 + 3 = \underline{\quad}$
3. $14 + 3 = \underline{\quad}$	4. $24 + 10 = \underline{\quad}$

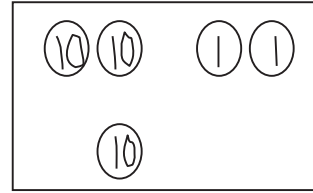
Make a number bond or use the arrow way to solve the addition problems.

5. $6 + 24 = \underline{\quad}$	6. $14 + 20 = \underline{\quad}$
------------------------------------	-------------------------------------

7. Solve each addition sentence, and match.

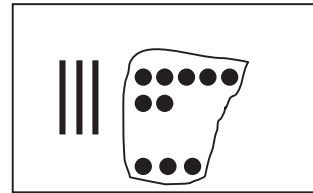
a.

$$22 + 1 = \underline{\quad}$$



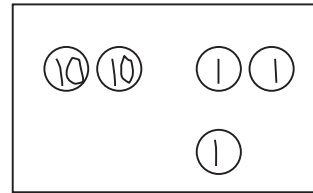
b.

$$13 + 6 = \underline{\quad}$$



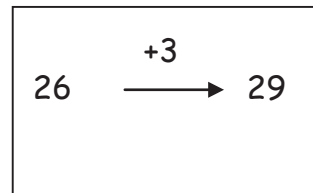
c.

$$3 + 26 = \underline{\quad}$$



d.

$$37 + 3 = \underline{\quad}$$



e.

$$22 + 10 = \underline{\quad}$$

