


Name _____


Date _____

1. Shade in an array with 3 rows of 2.




Write a repeated addition equation for the array.

2. Shade in an array with 2 rows of 4.



Write a repeated addition equation for the array.

3. Shade in an array with 4 columns of 5.



Write a repeated addition equation for the array.

4. Draw one more column of 2 to make a new array.




Write a repeated addition equation for the new array.

5. Draw one more row of 3 and then one more column to make a new array.



Write a repeated addition equation for the new array.

6. Draw one more row and then two more columns to make a new array.



Write a repeated addition equation for the new array.
