





Name _____

Date _____

Draw coins to show another way to make the same total value.

<p>1. 25 cents</p>  <p>1 dime 3 nickels is 25 cents.</p>	<p>Another way to make 25 cents:</p>
<p>2. 40 cents</p>  <p>4 dimes make 40 cents.</p>	<p>Another way to make 40 cents:</p>
<p>3. 60 cents</p>  <p>2 quarters and 1 dime makes 60 cents.</p>	<p>Another way to make 60 cents:</p>
<p>4. 80 cents</p>  <p>The total value of 3 quarters 1 nickel is 80 cents.</p>	<p>Another way to make 80 cents:</p>

5. Samantha has 67 cents in her pocket. Write two coin combinations she could have that would equal the same amount.

--	--

6. The store clerk gave Jeremy 2 quarters, 3 nickels, and 4 pennies. Write two other coin combinations that would equal the same amount of change.

--	--

7. Chelsea has 10 dimes. Write two other coin combinations she could have that would equal the same amount.

--	--