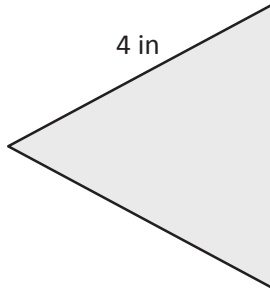


Name _____

Date _____

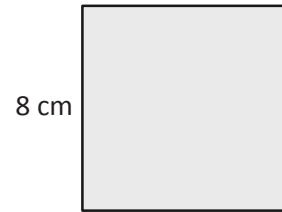
1. Label the unknown side lengths of the regular shapes below. Then, find the perimeter of each shape.

a.



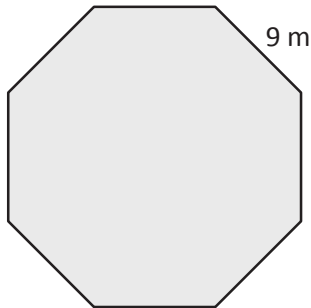
Perimeter = _____ in

b.



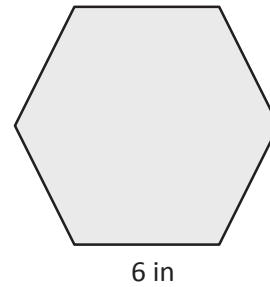
Perimeter = _____ cm

c.



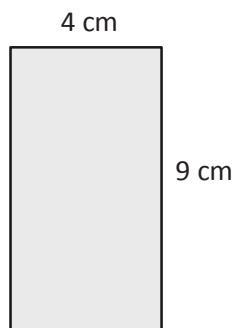
Perimeter = _____ m

d.



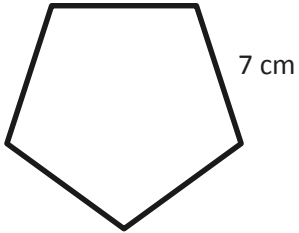
Perimeter = _____ in

2. Label the unknown side lengths of the rectangle below. Then, find the perimeter of the rectangle.



Perimeter = _____ cm

3. Roxanne draws a regular pentagon and labels a side length as shown below. Find the perimeter of Roxanne's pentagon.



4. Each side of a square field measures 24 meters. What is the perimeter of the field?
5. What is the perimeter of a rectangular sheet of paper that measures 8 inches by 11 inches?