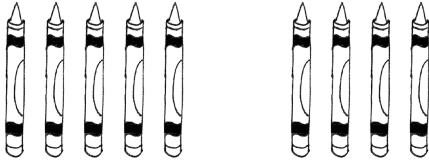


Name _____

Date _____

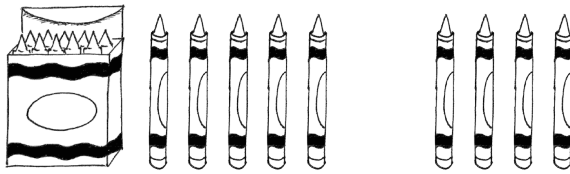
Solve the problems.

1.



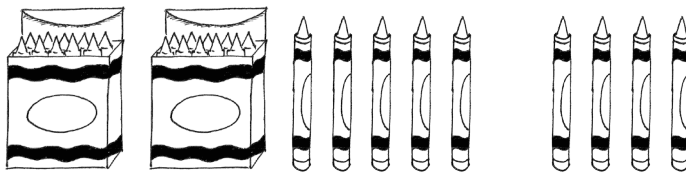
$$5 + 4 = \underline{\quad}$$

2.



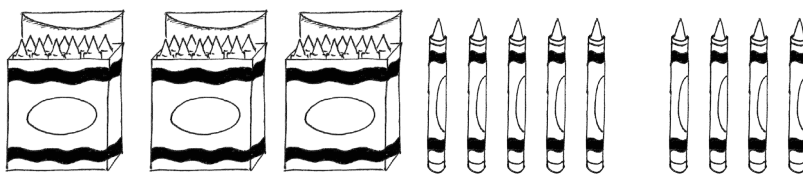
$$15 + 4 = \underline{\quad}$$

3.



$$25 + 4 = \underline{\quad}$$

4.



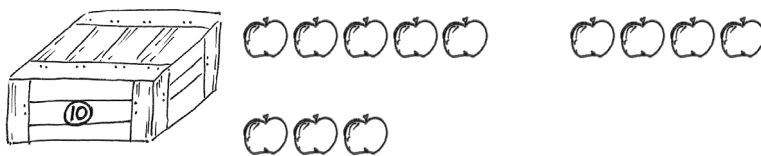
$$35 + 4 = \underline{\quad}$$

5.



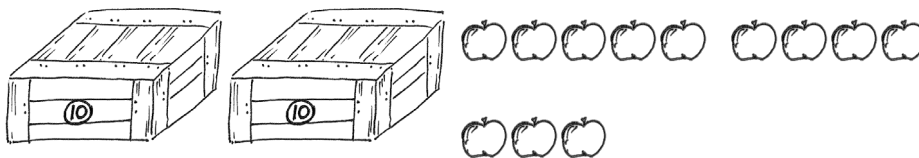
$$8 + 4 = \underline{\quad}$$

6.



$$18 + 4 = \underline{\quad}$$

7.



$$28 + 4 = \underline{\quad}$$

Use the first number sentence in each set to help you solve the other problems.

<p>8.</p> <p>a. $5 + 2 =$ _____</p> <p>b. $15 + 2 =$ _____</p> <p>c. $25 + 2 =$ _____</p> <p>d. $35 + 2 =$ _____</p>	<p>9.</p> <p>a. $5 + 5 =$ _____</p> <p>b. $15 + 5 =$ _____</p> <p>c. $25 + 5 =$ _____</p> <p>d. $35 + 5 =$ _____</p>
<p>10.</p> <p>a. $2 + 7 =$ _____</p> <p>b. $12 + 7 =$ _____</p> <p>c. $22 + 7 =$ _____</p>	<p>11.</p> <p>a. $7 + 4 =$ _____</p> <p>b. $17 + 4 =$ _____</p> <p>c. $27 + 4 =$ _____</p>
<p>12.</p> <p>a. $8 + 7 =$ _____</p> <p>b. $18 + 7 =$ _____</p> <p>c. $28 + 7 =$ _____</p>	<p>13.</p> <p>a. $3 + 9 =$ _____</p> <p>b. $13 + 9 =$ _____</p> <p>c. $23 + 9 =$ _____</p>

Solve the problems. Show the 1-digit addition sentence that helped you solve.

14. $24 + 5 =$ _____

15. $24 + 7 =$ _____